




Yanda verilen kesir kadarını boyayınız.


 1

 $\frac{1}{2}$

 $\frac{3}{4}$

 $\frac{2}{5}$

 $\frac{3}{8}$

 $\frac{6}{10}$

 $\frac{4}{8}$

 $\frac{2}{10}$



Yanda verilen kesir kadarını boyayınız.



$\frac{1}{3}$



$\frac{5}{6}$



$\frac{3}{6}$



$\frac{4}{5}$



$\frac{9}{10}$



$\frac{5}{9}$



$\frac{1}{4}$



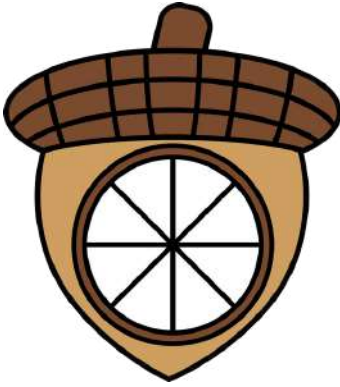
$\frac{5}{8}$


ADI SOYADI:

ETKİNLİK ADI: KESİRLER





Her meşe palamudu için kendi kesirinizi oluşturunuz.
Her satırda kesirinizi boyayıp ve gösteriniz
















Her meşe palamudu için kendi kesirinizi oluşturunuz.
Her satırda kesirinizi boyayıp ve gösteriniz

